

St. Agnes Academy

Honors Geometry

Summer Math Packet



Honors Geometry Summer Work Packet

This workbook contains problems designed to ensure the student's readiness for Honors Geometry. The ten topics covered in this packet are concepts that should be mastered before entering Honors Geometry. If any of these topics have not been mastered, the accompanying Review and Study Guide including explanations, examples and extra problems can be viewed or printed to help you complete your summer packet. It is strongly recommended that calculators NOT be used to complete the following problems since the objective of this packet is to verify the student's understanding of the concepts.

Topics Covered in this Packet:

1. Order of Operations
 2. Fractions
 3. Exponents
 4. Radicals
 5. Simplifying Expressions
 6. Solving Equations
 7. Solving Inequalities
 8. Linear Graphs
 9. Multiplying, Factoring and Solving Polynomial Expressions and Equations
 10. Solving Systems of Equations
-

Name: _____

Please place all answers on the answer sheet. Please do not use a calculator to complete this packet.

A. Order of Operations

Evaluate each expression. Write your answer in simplest form.

1. $2^2 \cdot 2 + [8 - (4^2 - 5)]$ 2. $[15(10) - 8(10)] \div 10$ 3. $(8 - 2)(12 - 3) \left(\frac{1}{2}\right) [4 + 1(2)]$

4. $-4[(3 + 2 \times 3) - 5] + 10$ 5. $80 \div 4 \times 3 - 2 \times 8$ 6. $3^2 + 7 \times 2 - 8 \times 2$

B. Fractions

Evaluate each expression. Write your answer in simplest form. Where applicable, leave answers as improper fractions. (Reduce, reduce, and reduce!)

7. $\frac{1}{3} \left(\frac{5}{6} - \frac{3}{4} + \frac{2}{3} \right)$ 8. $\frac{\frac{3}{9} - \frac{8}{12}}{\frac{3}{8} \cdot 2}$ 9. $-\frac{4}{9} \cdot \frac{3}{2} - \frac{5}{6} + 3$

10. $\left(4 - \frac{5}{6} + 3 \times 2 \right) \div \frac{5}{6}$ 11. $\frac{\frac{2}{3} + 4}{\frac{5}{6}}$ 12. $\frac{\frac{3}{2} + \frac{3}{4} + \frac{3}{8}}{21}$

C. Exponents

Simplify each expression. Write your answer in simplest form. Where applicable, leave answers as improper fractions. The simplified expression should have no negative exponents.

13. $\frac{4x^8}{6x^{-5}}$ 14. $(6xy^2)(-8x + 9y)$ 15. $(3x \cdot x^3)^{-2}$

16. $\frac{x^2y}{3y^3x^3} \cdot \frac{18x^4y^2}{xy^6}$ 17. $(12xy)^0 (x^2y^4)^5$ 18. $\frac{2x^{-2}y}{3y^{-3}x^2} \cdot \frac{3x^4}{8y^{-2}}$

D. Radicals

Write each answer in simplest radical form. Answers should not be in decimals!

19. $\sqrt{36}$

20. $\sqrt{45}$

21. $\sqrt{24} \cdot \sqrt{54}$

22. $\frac{\sqrt{112}}{\sqrt{14}}$

23. $\sqrt{\frac{48}{5}}$

24. $\sqrt{\frac{10}{25}} \cdot \sqrt{72} \cdot 5\sqrt{\frac{98}{36}}$

E. Simplifying Expressions

Simplify each expression. Write your answer in simplest form.

25. $(2y^3 - 9 - y + 16) - (5y^3 + 3y - 3)$

26. $-7x + 8(-2x + 5)$

27. $4y(2 - y) + 3y^2$

28. $5(x + y) - 4(3x - 2y + 1)$

29. $\frac{30x^2 + 20x - 10}{-5}$

30. $\frac{6x^4 + 27x^5 + 3x^4 + 3x^5}{3x^3}$

F. Solving Equations

Solve each of the following equations for x .

31. $3 - 2(x - 1) = 2 + 4x$

32. $8x - 4 + 3(x + 7) = 6x - 3(x - 3)$

33. $16x - 3(4x + 7) = 6x - (2x + 21)$

34. $x - 3 - 5(x + 7) = 10(x + 3) - (7x + 5)$

35. $-6x^2 = -216$

36. $\frac{2}{3} = \frac{x + 7}{3x}$

37. $\frac{x + 6}{4} = \frac{4x}{16}$

38. $16x + 24 = 7(x + 6)$

Solve each equation for the indicated variable.

39. $ax + r = 7$, for x

40. $y = 3x + 3b$, for b

41. $y = mx + 6$, for m

G. Solving Inequalities

Solve each of the following inequalities for x .

$$42. 4x + 7 - x \leq 31$$

$$43. 4x + 5 \geq x + 26$$

$$44. 2(x - 3) + 8x \leq 11$$

Solve each of the following compound inequalities for x .

$$45. -7 \leq 3x + 2 \leq 8$$

$$46. -2 \leq 4x + 6 < 22$$

$$47. 8 < 3x - 1 \leq 11$$

H. Linear Graphs

Given two points M & N on the coordinate plane, find the slope of \overline{MN} , and state the slope of the line perpendicular to \overline{MN} .

$$48. M(9,6), N(1,4)$$

$$49. M(-2,2), N(4, -4)$$

$$50. M(-9,16), N(-11,16)$$

Find the x -intercept and y -intercept of the given line. Using the intercepts, graph the line.

$$51. y = x - 5$$

$$52. 6x + 2y = -12$$

$$53. 3y = 9x + 15$$

$$54. y = -2x + 1$$

$$55. y - 10 = 2(x - 4)$$

$$56. 6x - 5 = 2y + 3$$

Find the slope and y -intercept of the graph of the equation. Using slope-intercept form, graph the line.

$$57. y - 2x = 7$$

$$58. y = -\frac{2}{3}x + 3$$

$$59. 3x + 6y = 12$$

I. Multiplying, Factoring and Solving Polynomial Expressions and Equations

Use the FOIL method to find each product.

60. $(3x - 2)(x - 1)$

61. $(2x - 9)(3x - 8)$

62. $(3x - 5)^2$

Find the greatest common factor and factor it out of the expression.

63. $-4x^3 - 20x^2 + 16x$

64. $3x^5y^2 - 21x^2y^7$

65. $15x^5 - 10x^4 + 5x^2$

Factor each expression completely.

66. $x^2 - 25$

67. $x^2 + 2x - 8$

68. $x^2 - 2x - 24$

69. $9x^2 - 81$

70. $4x^2 + 8x - 21$

71. $2x^3 + 4x^2 - 6x$

Using the Zero Product Property, solve the following quadratic equations for x .

72. $x^2 = 25$

73. $3x^2 = 48$

74. $x^2 - 9x - 36 = 0$

75. $x^2 - 3x + 2 = 0$

76. $2x^2 - 15x - 8 = 0$

77. $5x^2 - 17x + 6 = 0$

Using the Quadratic Formula, solve the following quadratic equations.

78. $x^2 - 2x + 9 = 0$

79. $4x^2 - 5x - 4 = 0$

80. $6x^2 - 7x - 3 = 0$

J. Solving Systems of Equations

Solve the following systems by graphing.

81. $y = -x$
 $y = x - 2$

82. $y = -2x - 4$
 $y = -2x - 1$

83. $-x + y = -8$
 $2x + y = 4$

Solve the following systems using substitution.

84. $y = x + 3$
 $3x - 3y = -9$

85. $3x + 2y = 8$
 $x + 4y = -4$

86. $x - 2y = -13$
 $y = -2x - 6$

Solve the following systems using linear combinations.

87. $4x + y = 2$
 $x - y = -17$

88. $4x - 3y = 11$
 $3x + 2y = -13$

89. $5x + 2y = 5$
 $3x + y = 2$



Please place all answers on this answer sheet. Problems that require graphs should be done on the included grids on the next pages.

- | | | |
|-----------|-----------|--------------------------|
| 1. _____ | 21. _____ | 41. _____ |
| 2. _____ | 22. _____ | 42. _____ |
| 3. _____ | 23. _____ | 43. _____ |
| 4. _____ | 24. _____ | 44. _____ |
| 5. _____ | 25. _____ | 45. _____ |
| 6. _____ | 26. _____ | 46. _____ |
| 7. _____ | 27. _____ | 47. _____ |
| 8. _____ | 28. _____ | 48. _____ |
| 9. _____ | 29. _____ | 49. _____ |
| 10. _____ | 30. _____ | 50. _____ |
| 11. _____ | 31. _____ | 51. ON GRAPH PAGE |
| 12. _____ | 32. _____ | 52. ON GRAPH PAGE |
| 13. _____ | 33. _____ | 53. ON GRAPH PAGE |
| 14. _____ | 34. _____ | 54. ON GRAPH PAGE |
| 15. _____ | 35. _____ | 55. ON GRAPH PAGE |
| 16. _____ | 36. _____ | 56. ON GRAPH PAGE |
| 17. _____ | 37. _____ | 57. ON GRAPH PAGE |
| 18. _____ | 38. _____ | 58. ON GRAPH PAGE |
| 19. _____ | 39. _____ | 59. ON GRAPH PAGE |
| 20. _____ | 40. _____ | 60. _____ |
| | | 61. _____ |
| | | 62. _____ |
| | | 63. _____ |

64. _____

65. _____

66. _____

67. _____

68. _____

69. _____

70. _____

71. _____

72. _____

73. _____

74. _____

75. _____

76. _____

77. _____

78. _____

79. _____

80. _____

81. _____

82. _____

83. _____

84. _____

85. _____

86. _____

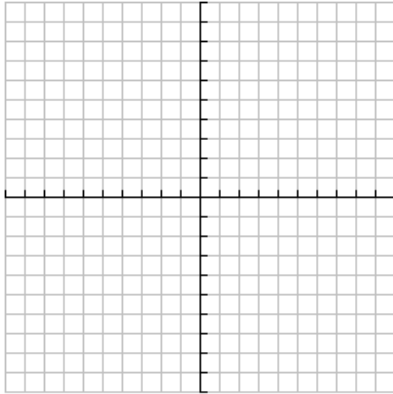
87. _____

88. _____

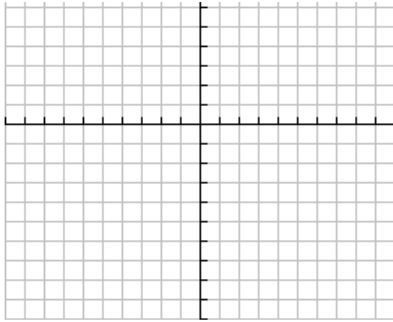
89. _____

GRAPH PAGE:

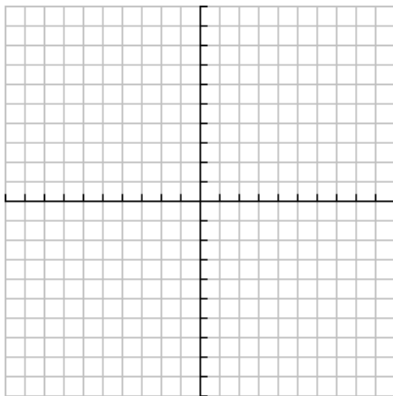
51.



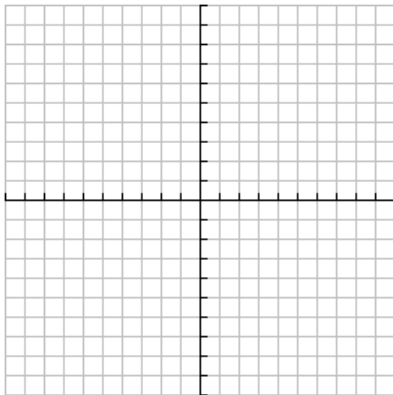
52.



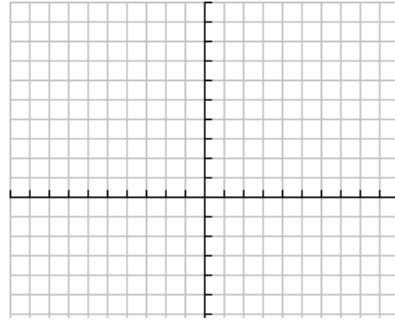
53.



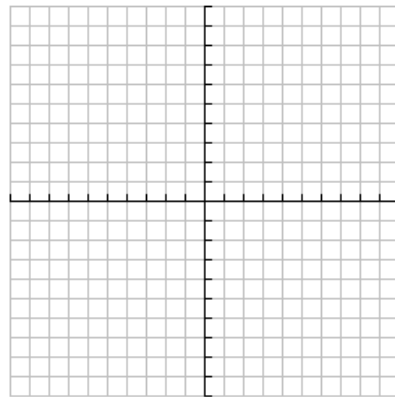
54.



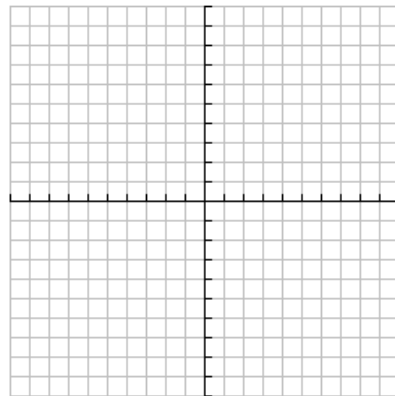
55.



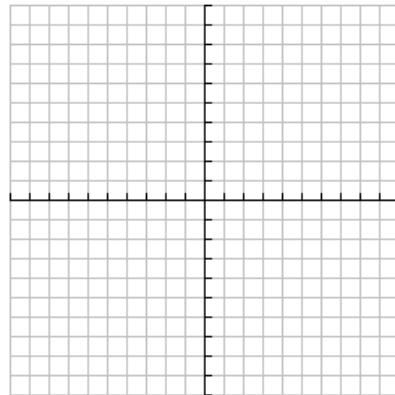
56.



57.

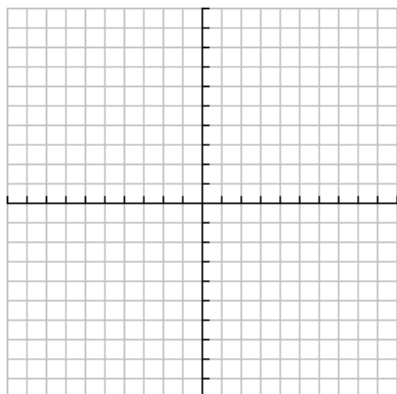


58.



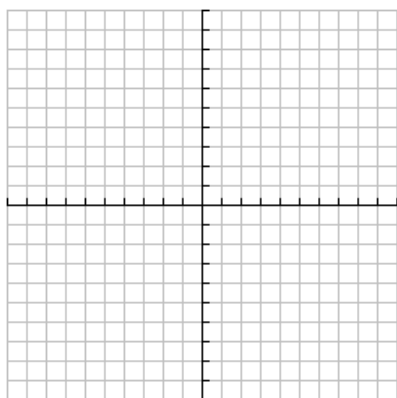
GRAPH PAGE:

59.

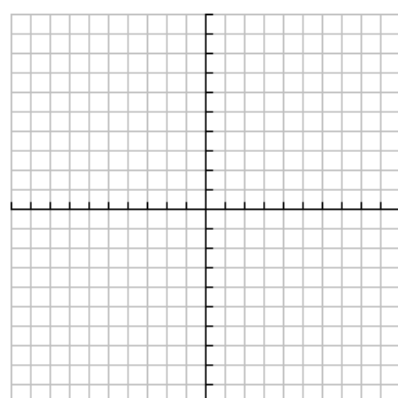


Graphs for doing 81-83

81.



82.



83.

